




Name _____

1 Here is a number.

Thousands	Hundreds	Tens	Ones
			

- Subtract 3 ones
- Add 2 thousands
- Subtract 1 hundred

What is the new number?

5,005








1 mark

2 Complete the missing digits.

	4	3	7	9
+	1	4	2	0
	5	7	9	9

2 marks

3 Calculate $4,356 + 2,302$

Thousands	Hundreds	Tens	Ones
			
			

6,658

1 mark

4 Calculate $438 - 177$

261

1 mark

5 Use the digit cards to complete the number sentence.

9 3 1 7

$2,345 + 102 > \boxed{1}\boxed{}\boxed{}\boxed{}$

1 mark

Any combination with the 1 in the thousands column.

- 6 There are 6,128 people in a village.
2,503 are women, 2,811 are men and the rest
are children.

Complete the bar model to represent this.

6,128		
2,503	2,811	?

Also accept 2,503
and 2,811 swapped.

How many children are there?

814

- 7 Tom and Hannah have £1 between them.
Tom has 12p more than Hannah.
How much do they each have?

Tom 56 p Hannah 44 p

☐

1 mark

☐

2 marks

8 $718 + 395 = 395 + \underline{718}$

$719 + 395 = 720 + \underline{394}$

$2,719 + 4,395 = 3,719 + \underline{3,395}$

☐

3 marks

- 9 Teddy is asked to estimate the answer to
 $1,923 + 3,246$

He says,



I think the answer will be close
to 4,000 because I have rounded
the numbers and added 1,000
and 3,000

What is wrong with Teddy's estimate?

Teddy should have rounded 1,923 to
2,000 instead of 1,000

What would be a better estimate?

5,000

☐

1 mark

☐

1 mark

☐

1 mark

Circle how confident you feel with addition & subtraction.

1

2

3

4

5

Not
confident

Very
confident